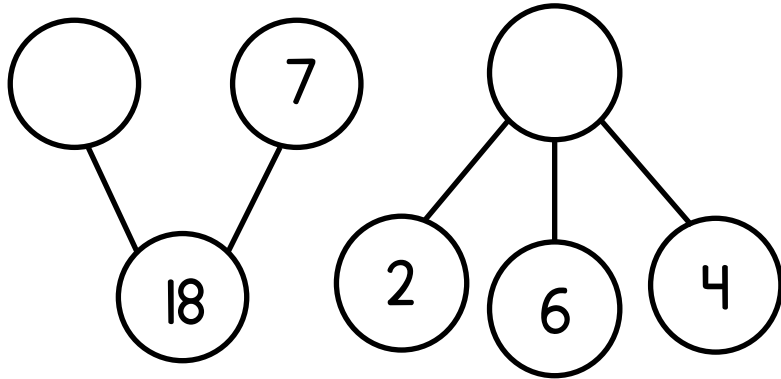


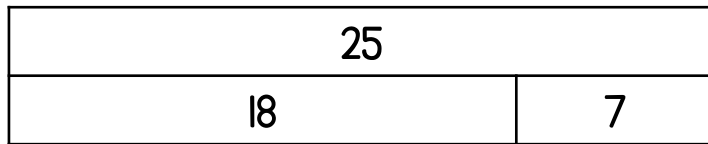
Name \_\_\_\_\_

1 Complete the part-whole models.



2 marks

2 Use the bar model to complete the number sentences.



7 +  = 25       -  = 18



2 marks

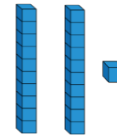
3 Complete the missing boxes.

10 less	Number	10 more
	fifteen	twenty-five

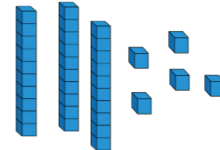


2 marks

4 Jack makes this number.



Meg makes this number.



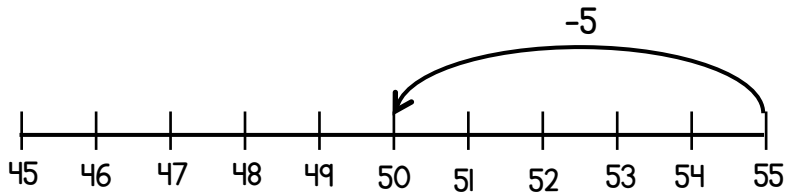
What is the total of their numbers?

\_\_\_\_\_



1 mark

- 5 Amir is working out  $55 - 8 =$   
He uses a number line.



Complete Amir's method.

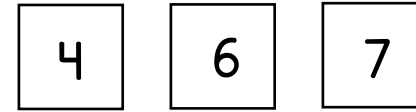
- 6 Circle **two** numbers which total 100

35    45    55    65    75

- 7 Dan has 28 grapes.  
He eats 12 grapes.  
How many grapes are left?

\_\_\_\_\_

- 8 Here are three digit cards.



Use the cards to find two different ways to complete the number sentence.

$$\square + \square \square = 53$$

$$\square + \square \square = 53$$

1 mark

1 mark

2 marks

1 mark

Circle how confident you feel with addition & subtraction.

1            2            3            4            5

Not  
confident

Very  
confident