

**Groups 1 & 2** Wednesday 10th February, 2021

Use 'Maths Grid Method' power point to help learn.

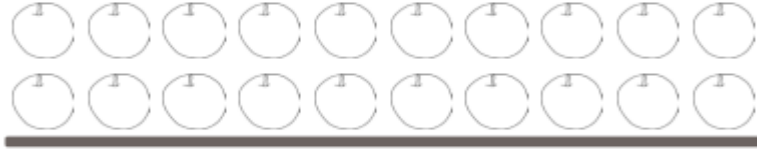
L.O. Use the grid method to multiply

S.C. Know my place value

Use partitioning

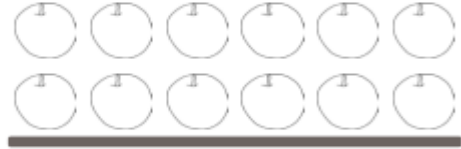
Write multiplication sentences

$16 \times 2 =$  \_\_\_\_\_



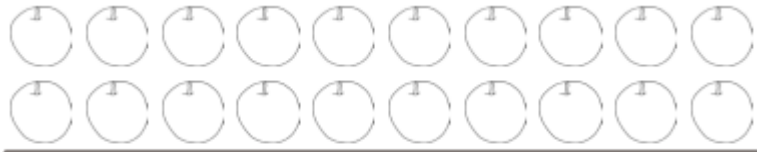
$10 \times 2$

add



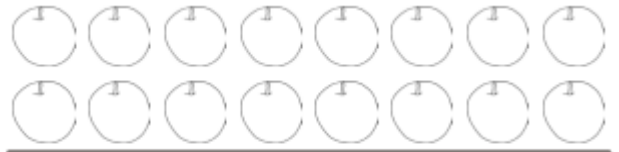
$6 \times 2$

$18 \times 2 =$  \_\_\_\_\_




$10 \times 2$

add



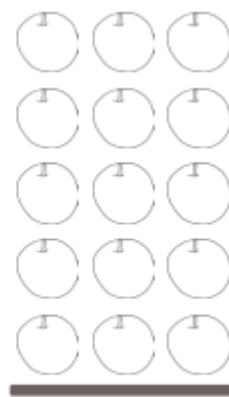
$8 \times 2$

$13 \times 5 =$  \_\_\_\_\_




$10 \times 5$

add




$3 \times 5$

$19 \times 5 =$  \_\_\_\_\_



$10 \times 5$

add



$9 \times 5$

This is what  $19 \times 5$  looks like in a grid:

x	10	9
5	$10 \times 5 =$ _____	$9 \times 5 =$ _____