


Identifying Quadrilateral

Write the name below each quadrilateral.

1)



2)



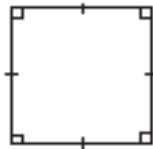
3)



4)



5)



6)



7)



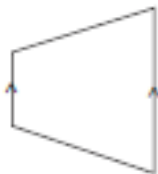
8)



9)



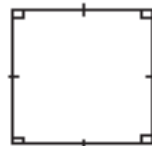
10)



11)



12)




Naming Quadrilaterals

Quadrilaterals are polygons with four edges (sides), four vertices (corners).
Choose the word from the word bank and write the correct name of each quadrilateral.


SHAPE NAME

Word-bank


Kite



Rhombus




Trapezium



Rectangle



Square



Parallelogram

